





# CURIOUS ABOUT MONEY?

level 2

1. Penny is planning her birthday party. She has 35€ in her piggy bank.  
What can she buy? Look at the shopping lists and tick ✓:



 <p>           pizza 9€            orange juice 4€            new cd 13€            confetti 6€         </p> <input data-bbox="436 885 524 980" type="checkbox"/>	 <p>           chips 5€            soda water 3€            biscuits 4€            balloons 7€            fruit 8€         </p> <input data-bbox="792 885 880 980" type="checkbox"/>	 <p>           sandwiches 10€            birthday            cake 15€            lemonade 3€            DJ 20€         </p> <input data-bbox="1149 885 1236 980" type="checkbox"/>
--	---	---

2. There is 135 gold coins in the treasure chest.  
Every one of the three pirates gets 25.  
How much does the captain get?

