


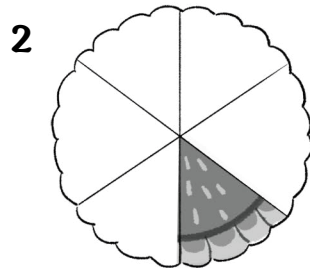
HALLOWEEN

Circle the right fraction represented by the shaded part of each pumpkin cake. The First one is done as an example.

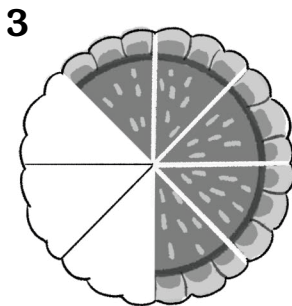
Zakrúžkuj správny zlomok predstavovaný vytieňovanou časťou každého tekvicového koláča. Prvý je uvedený ako príklad.




$\frac{1}{2}$ $\frac{3}{6}$ $\frac{5}{6}$ $\frac{1}{6}$ $\frac{6}{5}$



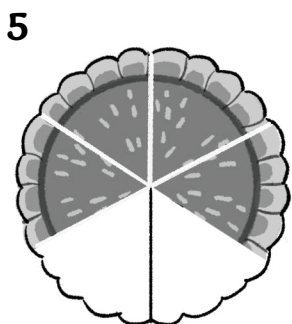
$\frac{1}{4}$ $\frac{3}{4}$ $\frac{1}{6}$ $\frac{1}{3}$ $\frac{1}{5}$




$\frac{1}{2}$ $\frac{3}{8}$ $\frac{1}{6}$ $\frac{1}{7}$ $\frac{5}{8}$



$\frac{1}{3}$ $\frac{3}{6}$ $\frac{1}{2}$ $\frac{1}{5}$ $\frac{3}{4}$



$\frac{4}{6}$ $\frac{5}{6}$ $\frac{4}{5}$ $\frac{1}{6}$ $\frac{3}{5}$



$\frac{1}{3}$ $\frac{1}{4}$ $\frac{1}{2}$ $\frac{1}{5}$ $\frac{2}{1}$

